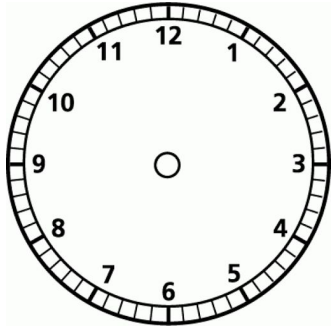


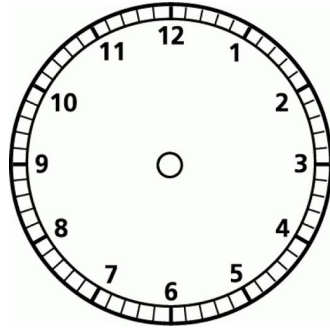
# What Time Is It?

Name: \_\_\_\_\_ Date: \_\_\_\_\_

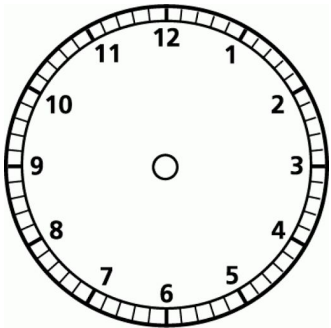
**Directions:** Look at the big hand and the little hand on each of the following clocks. What time is on each clock? Write the answer in the space provided next to each clock.



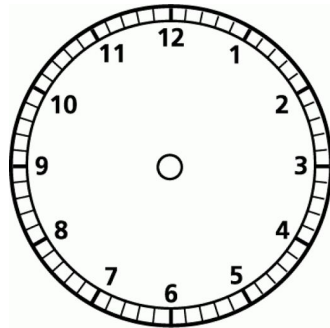
\_\_\_\_\_ : \_\_\_\_\_



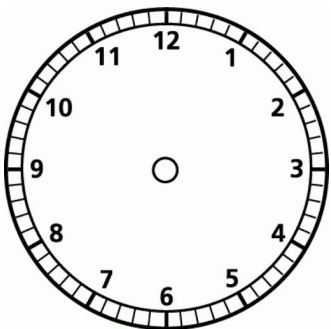
\_\_\_\_\_ : \_\_\_\_\_



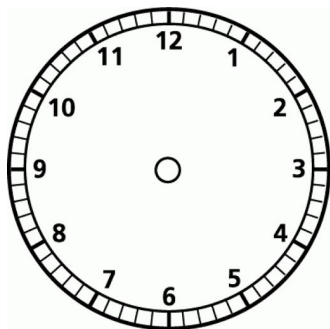
\_\_\_\_\_ : \_\_\_\_\_



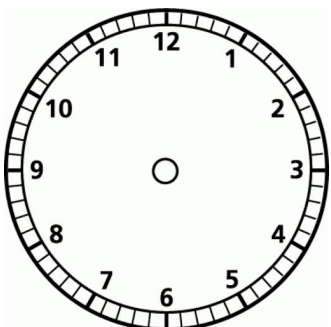
\_\_\_\_\_ : \_\_\_\_\_



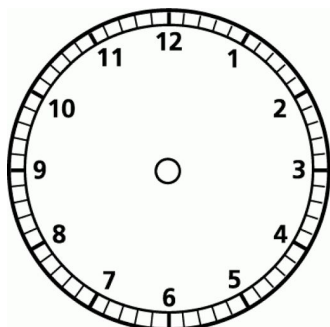
\_\_\_\_\_ : \_\_\_\_\_



\_\_\_\_\_ : \_\_\_\_\_



\_\_\_\_\_ : \_\_\_\_\_



\_\_\_\_\_ : \_\_\_\_\_